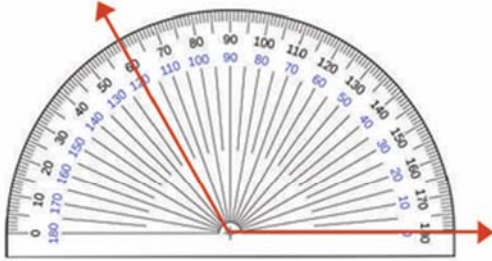


Name \_\_\_\_\_

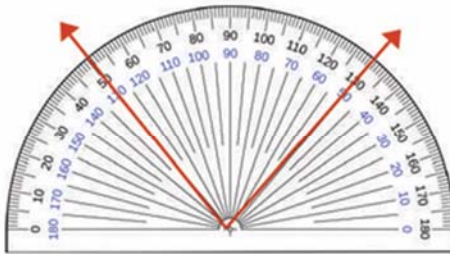
## Reading a Protractor

Read the protractor and measure each angle.



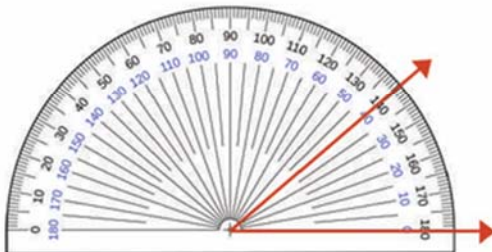
Angle : \_\_\_\_\_

**40°**



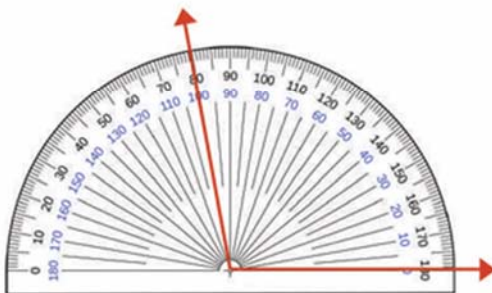
Angle : \_\_\_\_\_

**100°**



Angle : \_\_\_\_\_

**120°**



Angle : \_\_\_\_\_

**80°**