









Name _____

Missing numbers

Write the missing numbers in each row.

 <p>A caterpillar with five segments. The first segment is green with the number 5. The second is yellow with 6. The third is green with 7. The fourth is yellow with 8. The fifth is green with 9.</p>	 <p>A caterpillar with five segments. The first segment is green with the number 3. The second is yellow with 4. The third is green with 5. The fourth is yellow with 6. The fifth is green with 7.</p>
 <p>A caterpillar with five segments. The first segment is green with the number 12. The second is yellow with 13. The third is green with 14. The fourth is yellow with 15. The fifth is green with 16.</p>	 <p>A caterpillar with five segments. The first segment is green with the number 20. The second is yellow with 21. The third is green with 22. The fourth is yellow with 23. The fifth is green with 24.</p>
 <p>A caterpillar with five segments. The first segment is green with the number 10. The second is yellow with 11. The third is green with 12. The fourth is yellow with 13. The fifth is green with 14.</p>	 <p>A caterpillar with five segments. The first segment is green with the number 4. The second is yellow with 5. The third is green with 6. The fourth is yellow with 7. The fifth is green with 8.</p>
 <p>A caterpillar with five segments. The first segment is green with the number 14. The second is yellow with 15. The third is green with 16. The fourth is yellow with 17. The fifth is green with 18.</p>	 <p>A caterpillar with five segments. The first segment is green with the number 31. The second is yellow with 32. The third is green with 33. The fourth is yellow with 34. The fifth is green with 35.</p>