






Name _____

ANSWERS

WORKSHEET 8 - ADDITION SENTENCES

Add the whole tens and color according to the color code.

$50+10=$ <u>60</u>	$10+20=$ <u>30</u>	$40+30=$ <u>70</u>	$40+50=$ <u>90</u>	$70+10=$ <u>80</u>	$10+10=$ <u>20</u>
					



How Did You Do? 😊 😐 ☹️