










NAME: _____

WORKSHEET 8 - ADDING MONEY

Look at the item price table, then add the item prices and write the total quantity.



-  +  +  +  +  +  +  = ¢
-  +  +  +  +  +  +  = ¢
-  +  +  +  +  +  +  = ¢
-  +  +  +  +  +  +  = ¢
-  +  +  +  +  +  +  = ¢
-  +  +  +  +  +  +  = ¢
-  +  +  +  +  +  +  = ¢
-  +  +  +  +  +  +  = ¢

How Did You Do? 