

















ANSWERS

WORKSHEET 7 - ADDING MONEY

Look at the item price table, then add the item prices and write the total quantity.









23 ¢	15 ¢	12 ¢	9 ¢	8 ¢	5 ¢	14 ¢	21 ¢
							









1  +  +  +  +  +  +  +  = 100 ¢









2  +  +  +  +  +  +  +  = 97 ¢









3  +  +  +  +  +  +  +  = 126 ¢

4  +  +  +  +  +  +  +  = 111 ¢

5  +  +  +  +  +  +  +  = 97 ¢

6  +  +  +  +  +  +  +  = 108 ¢

7  +  +  +  +  +  +  +  = 126 ¢

8  +  +  +  +  +  +  +  = 107 ¢

How Did You Do? 😊 😐 😞