










NAME: -----

WORKSHEET 7 - COUNTING MONEY

Count and add the total number of coins in each row. Then mark with an X whether the result is true or false.

	<u>Money</u>	<u>Result</u>	<u>true</u>	<u>false</u>
1		100 cents		
2		70 cents		
3		12 cents		
4		90 cents		
5		25 cents		
6		56 cents		
7		30 cents		
8		66 cents		
9		110 cents		

How Did You Do? 😊 😐 😞