












Name _____






Counting Coins


Add the coins. Write the total amounts in cents.

					
1¢	1¢	5¢	10¢	25¢	= <u>42</u> ¢

						
¢	¢	¢	¢	¢	¢	= _____ ¢

					
¢	¢	¢	¢	¢	= _____ ¢

					
¢	¢	¢	¢	¢	= _____ ¢

			
¢	¢	¢	= _____ ¢