










































































NAME: _____

WORKSHEET 7 - ADDING MONEY

Look at the item price table, then add the item prices and write the total quantity.

23¢	15¢	12¢	9¢	8¢	5¢	14¢	21¢
							

-  +  +  +  +  +  +  +  = ¢
-  +  +  +  +  +  +  +  = ¢
-  +  +  +  +  +  +  +  = ¢
-  +  +  +  +  +  +  +  = ¢
-  +  +  +  +  +  +  +  = ¢
-  +  +  +  +  +  +  +  = ¢
-  +  +  +  +  +  +  +  = ¢
-  +  +  +  +  +  +  +  +  = ¢

How Did You Do? 😊 😐 😞