













ANSWERS

WORKSHEET 6 - ADDING WITH DOTS

COUNT THE DOTS AND ADD THEM


$$\underline{3} + \underline{3} = \underline{6}$$

$$\underline{5} + \underline{4} = \underline{9}$$

$$\underline{4} + \underline{3} = \underline{7}$$

$$\underline{0} + \underline{3} = \underline{3}$$

$$\underline{4} + \underline{4} = \underline{8}$$

$$\underline{2} + \underline{2} = \underline{4}$$

$$\underline{3} + \underline{2} = \underline{5}$$

$$\underline{0} + \underline{4} = \underline{4}$$

$$\underline{5} + \underline{3} = \underline{8}$$

$$\underline{5} + \underline{5} = \underline{10}$$

$$\underline{6} + \underline{1} = \underline{7}$$

$$\underline{0} + \underline{5} = \underline{5}$$

How Did You Do? 😊 😐 ☹️