































NAME: _____

WORKSHEET 6 - ADDING MONEY

Look at the item price table, then add the item prices and write the total quantity. Add on all sides.



<input type="text" value="___ ¢"/>	<input type="text" value="___ ¢"/>	<input type="text" value="___ ¢"/>	<input type="text" value="___ ¢"/>	<input type="text" value="___ ¢"/>	<input type="text" value="___ ¢"/>								
	+		+		+		+		+		=	<input type="text" value="___ ¢"/>	
+		+		+		+		+		+		+	
	+		+		+		+		+		=	<input type="text" value="___ ¢"/>	
+		+		+		+		+		+		+	
	+		+		+		+		+		=	<input type="text" value="___ ¢"/>	
+		+		+		+		+		+		+	
	+		+		+		+		+		=	<input type="text" value="___ ¢"/>	
+		+		+		+		+		+		+	
	+		+		+		+		+		=	<input type="text" value="___ ¢"/>	
<input type="text" value="___ ¢"/>	<input type="text" value="___ ¢"/>	<input type="text" value="___ ¢"/>	<input type="text" value="___ ¢"/>	<input type="text" value="___ ¢"/>	<input type="text" value="___ ¢"/>								

How Did You Do? 😊 😐 ☹️