





Name _____

ANSWERS



WORKSHEET 5 - COMPARING COINS

Help each child know who has the most coins. Place the greater than symbol and the total of each.


Total coins: 68¢  Total coins: 48¢


Total coins: 63¢  Total coins: 49¢


Total coins: 54¢  Total coins: 63¢


Total coins: 48¢  Total coins: 76¢

How Did You Do? 