


NAME: _____

WORKSHEET 5

ASSOCIATIVE PROPERTY OF ADDITION


Fill in the missing numbers using the associative property of addition.


❖ $(18 + 5) + 3 = \underline{\quad\quad} + (3 + 18)$ 

❖ $6 + (4 + 1) = (1 + \underline{\quad\quad}) + 4$

❖ $(16 + 4) + 8 = 4 + (8 + \underline{\quad\quad})$

❖ $3 + (7 + 2) = (\underline{\quad\quad} + 3) + 7$

❖ $(8 + 6) + 5 = 8 + (5 + \underline{\quad\quad})$ 

❖ $(1 + 16) + 4 = \underline{\quad\quad} + (1 + 4)$ 

❖ $9 + (4 + 2) = (9 + \underline{\quad\quad}) + 2$

❖ $(8 + 1) + 5 = 8 + (1 + \underline{\quad\quad})$

❖ $4 + (7 + 3) = (\underline{\quad\quad} + 3) + 7$



How Did You Do?

