




ANSWERS

WORKSHEET 4 - ADDING MONEY


Look at the table of bread prices, then add up the prices of the items and write the total amount.






1.  +  +  = 58 ¢

2.  +  +  = 57 ¢

3.  +  +  = 34 ¢

4.  +  +  = 60 ¢

5.  +  +  = 31 ¢

How Did You Do? 😊 😐 😞