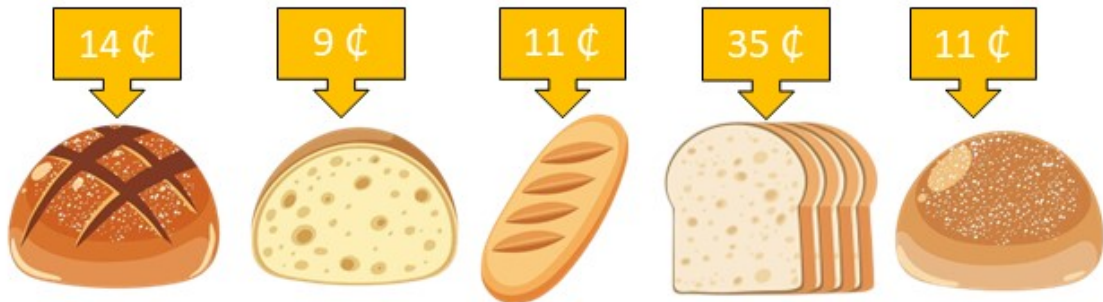





NAME: \_\_\_\_\_

## WORKSHEET 4 - ADDING MONEY




Look at the table of bread prices, then add up the prices of the items and write the total amount.



1.  +  +  = \_\_\_\_\_

2.  +  +  = \_\_\_\_\_

3.  +  +  = \_\_\_\_\_

4.  +  +  = \_\_\_\_\_

5.  +  +  = \_\_\_\_\_

How Did You Do? 