







Name _____

ANSWERS

WORKSHEET 3 - MAKING CHANGE

Below are some products, look at the price and write the change for each purchase:

Product	Price	Paid With	Change
	\$3.50	\$5.00	\$1.50
	\$1.75	\$2.00	\$0.25
	\$0.50	\$1.00	\$0.50
	\$1.00	\$2.00	\$1.00
	\$10.00	\$20.00	\$10.00
	\$2.00	\$5.00	\$3.00

How Did You Do? 😊 😐 😞