

ANSWERS

WORKSHEET 2 - ADDING WITH DOTS


COUNT THE DOTS AND ADD THEM




$$6 + 3 = 9$$




$$4 + 2 = 6$$



$$5 + 4 = 9$$



$$5 + 1 = 6$$



$$6 + 5 = 11$$

How Did You Do? 😊 😐 😞