






Name _____

Counting Coins

| Count the coins | Circle the correct amount | Write the total amount |
|---|---------------------------|-------------------------|
|  | 24¢ 19¢ 15¢ | _____ ----- _____ |
|  | 65¢ 60¢ 55¢ | _____ ----- _____ |
|  | 14¢ 22¢ 18¢ | _____ ----- _____ |
|  | 37¢ 32¢ 22¢ | _____ ----- _____ |
|  | 65¢ 75¢ 85¢ | _____ ----- _____ |