




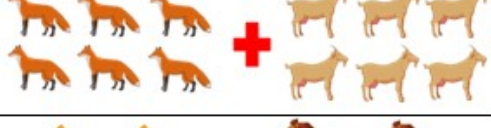




Name _____

ANSWERS

WORKSHEET 15 - ADDITION SENTENCES

Draw lines to match the sum picture with the correct sum.

	<input type="checkbox"/> 10
	<input type="checkbox"/> 6
	<input type="checkbox"/> 12
	<input type="checkbox"/> 8
	<input type="checkbox"/> 5
	<input type="checkbox"/> 7
	<input type="checkbox"/> 14
	<input type="checkbox"/> 9

Red lines connect the sums to the correct boxes: 4 horses + 4 foxes to 8; 2 elephants + 6 squirrels to 8; 3 turtles + 4 deer to 7; 5 cows + 6 zebras to 11; 3 pigs + 4 hippos to 7; 6 horses + 6 donkeys to 12; 5 horses + 4 lions to 9; 6 rabbits + 6 dogs to 12.

How Did You Do? 😊 😐 😞