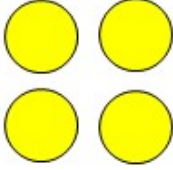


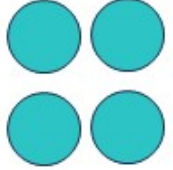


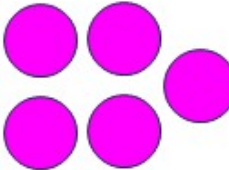

NAME: _____



WORKSHEET 14 - ADDING WITH DOTS



COUNT THE DOTS AND ADD THEM

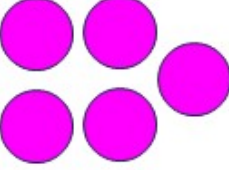
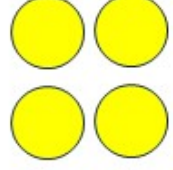
				
<input type="text"/>	+	<input type="text"/>	=	<input type="text"/>

				
<input type="text"/>	+	<input type="text"/>	=	<input type="text"/>

				
<input type="text"/>	+	<input type="text"/>	=	<input type="text"/>

				
<input type="text"/>	+	<input type="text"/>	=	<input type="text"/>

				
<input type="text"/>	+	<input type="text"/>	=	<input type="text"/>

				
<input type="text"/>	+	<input type="text"/>	=	<input type="text"/>

How Did You Do? 