



ANSWERS

WORKSHEET 13 - ADDING WITH DOTS

COUNT THE DOTS AND ADD THEM



$$12 + 12 = 24$$



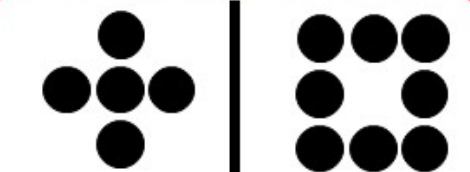
$$10 + 9 = 19$$



$$8 + 6 = 14$$



$$8 + 9 = 17$$



$$5 + 8 = 13$$



$$12 + 6 = 18$$

How Did You Do? 😊 😐 😞