






Name _____

ANSWERS

SCHOOL SUPPLIES WORKSHEET: ESTIMATING MONEY

Round the cost of the following items to the nearest dollar.

A) 	answer <u>\$ 62</u>
B) 	answer <u>\$ 6</u>
C) 	answer <u>\$ 25</u>
D) 	answer <u>\$ 26</u>
E) 	answer <u>\$ 5</u>

F) 	answer <u>\$ 965</u>
--	-------------------------

G) 	answer <u>\$ 28</u>
--	------------------------

How Did You Do? 😊 😐 😞