







ANSWERS

WORKSHEET 11 - ADDING MONEY

Add the prices of the items and join them with the equivalent values with a red line.

		
25 ¢	18 ¢	22 ¢

		
15 ¢	21 ¢	12 ¢

		
23 ¢	15 ¢	9 ¢

48 ¢



47 ¢



65 ¢



How Did You Do? 😊 😐 😞