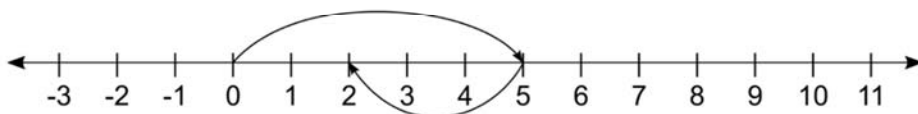


Name _____

Representation of Integers

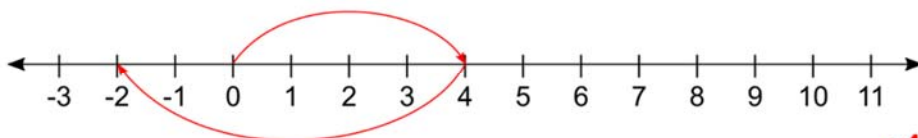
Using the number line add the following integers.

1) +5 and -3



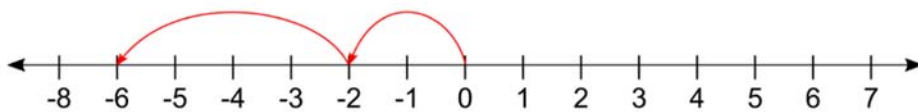
$$+5 + (-3) = -2$$

2) +4 and -6



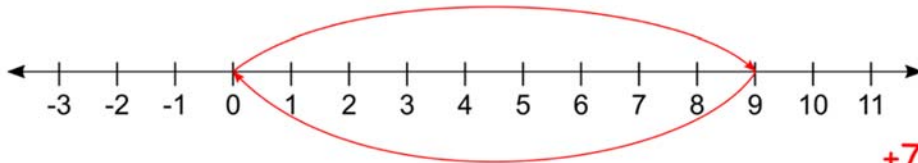
$$+4 + (-6) = -2$$

3) -2 and -4



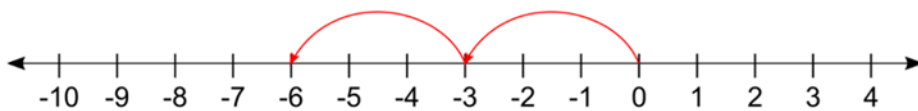
$$-2 + (-4) = -6$$

4) +7 and -7



$$+7 + (-7) = 0$$

1) -3 and -3



$$-3 + (-3) = -6$$