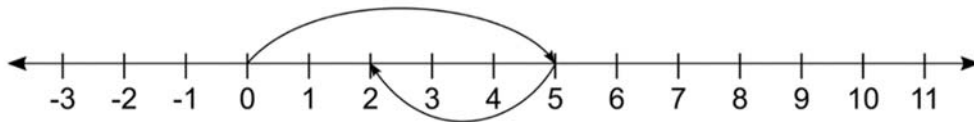


Name _____

Representation of Integers

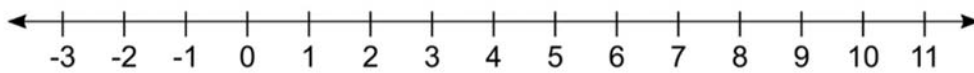
Using the number line add the following integers.

1) +5 and -3

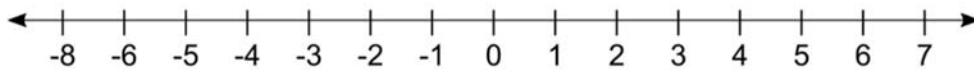


$$+5 + (-3) = -2$$

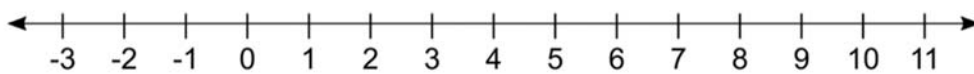
2) +4 and -6



3) -2 and -4



4) +7 and -7



1) -3 and -3

