







Name _____

Visual Fractions

Circle the fractions that each shape represents.

	$\frac{5}{8}$	$\frac{5}{8}$	$\frac{3}{8}$	$\frac{1}{2}$
	$\frac{1}{4}$	$\frac{5}{8}$	$\frac{5}{8}$	$\frac{5}{8}$
	$\frac{5}{8}$	$\frac{5}{8}$	$\frac{5}{8}$	$\frac{5}{7}$
	$\frac{1}{4}$	$\frac{5}{8}$	$\frac{5}{8}$	$\frac{5}{8}$
	$\frac{5}{8}$	$\frac{5}{8}$	$\frac{3}{4}$	$\frac{5}{8}$
	$\frac{5}{8}$	$\frac{1}{2}$	$\frac{5}{8}$	$\frac{5}{8}$