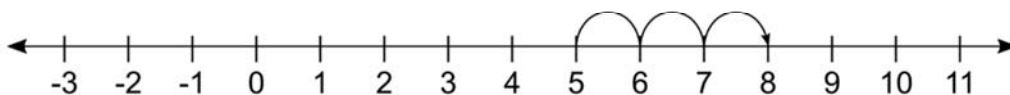


Name _____

Representation of Integers

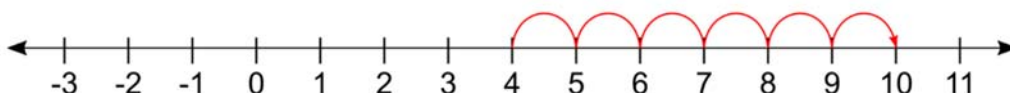
Using the number line, write the integer which is:

1) 3 more than 5



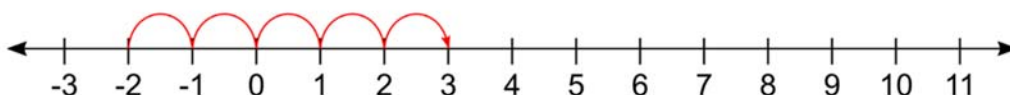
3 more than 5 is 8.

2) 6 more than 4



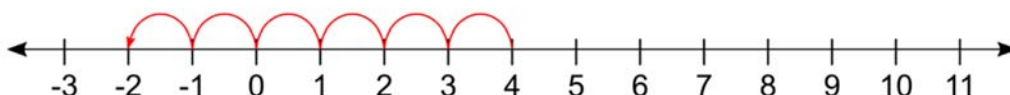
6 more than 4 is 10

3) 5 more than -2



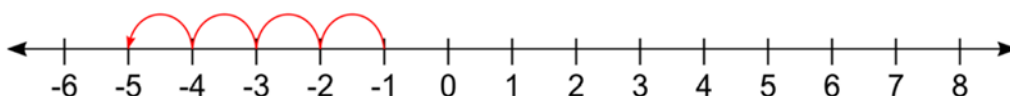
5 more than -2 is 3

4) 6 less than 4



6 less than 4 is -2

5) 4 less than -1



4 less than -1 is -5