



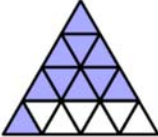







Name _____

Visual Fractions

Check the fraction that each shape represents

	$\frac{1}{4}$ <input type="checkbox"/> $\frac{3}{4}$ <input checked="" type="checkbox"/>		$\frac{4}{6}$ <input checked="" type="checkbox"/> $\frac{3}{6}$ <input type="checkbox"/>
	$\frac{4}{7}$ <input type="checkbox"/> $\frac{5}{7}$ <input checked="" type="checkbox"/>		$\frac{8}{16}$ <input type="checkbox"/> $\frac{12}{16}$ <input checked="" type="checkbox"/>
	$\frac{10}{16}$ <input checked="" type="checkbox"/> $\frac{12}{16}$ <input type="checkbox"/>		$\frac{2}{5}$ <input type="checkbox"/> $\frac{3}{5}$ <input checked="" type="checkbox"/>
	$\frac{12}{20}$ <input checked="" type="checkbox"/> $\frac{8}{20}$ <input type="checkbox"/>		$\frac{5}{8}$ <input checked="" type="checkbox"/> $\frac{3}{8}$ <input type="checkbox"/>
	$\frac{4}{12}$ <input type="checkbox"/> $\frac{6}{12}$ <input checked="" type="checkbox"/>		$\frac{3}{8}$ <input checked="" type="checkbox"/> $\frac{5}{8}$ <input type="checkbox"/>