
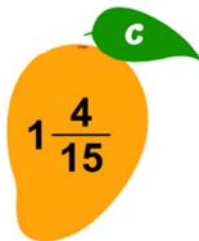
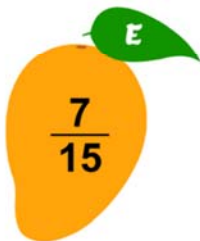

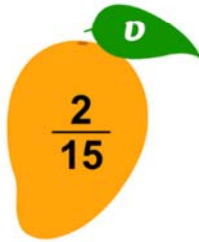
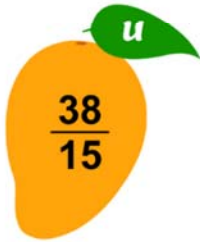



Name _____

Ordering Fractions

Write the weights of mangoes in the increasing order in the given box. Complete the sentence by writing each letter that matches the weight of mangoes in increasing order.



$\frac{2}{15}$, $\frac{7}{15}$, $\frac{11}{15}$, $\frac{17}{15}$, $1\frac{4}{15}$, $1\frac{8}{15}$, $\frac{29}{15}$, $\frac{38}{15}$, $3\frac{2}{15}$

Mango is delicious