

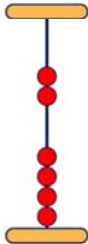
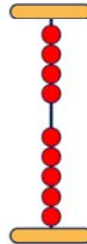

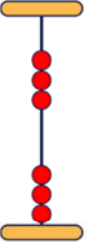

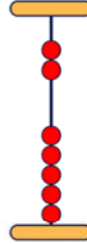
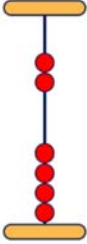


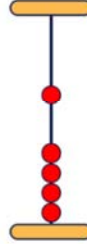


Name _____

Addition with the Abacus

Represent the additions on the abacus as shown in the example.

 $5 + 3 = 8$	 $3 + 1 = 4$	 $4 + 2 = 6$	 $5 + 4 = 9$
 $1 + 6 = 7$	 $3 + 3 = 6$	 $2 + 1 = 3$	 $5 + 2 = 7$
 $4 + 2 = 6$	 $7 + 1 = 8$	 $1 + 5 = 6$	 $4 + 1 = 5$