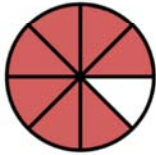


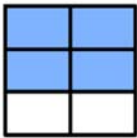

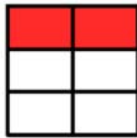
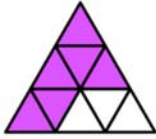
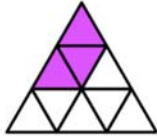
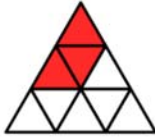



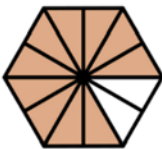



Name \_\_\_\_\_

# Visual Fractions

Subtract the fractions and write your answer using fraction models. Shade the shape in your answer.

	$\frac{7}{8}$	-		$\frac{3}{8}$	=	$\frac{4}{8}$	
	$\frac{4}{6}$	-		$\frac{2}{6}$	=	$\frac{2}{6}$	
	$\frac{6}{9}$	-		$\frac{3}{9}$	=	$\frac{3}{9}$	
	$\frac{7}{8}$	-		$\frac{5}{8}$	=	$\frac{2}{8}$	
	$\frac{10}{12}$	-		$\frac{3}{12}$	=	$\frac{7}{12}$	