


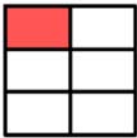
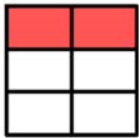

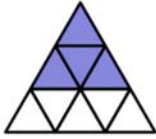
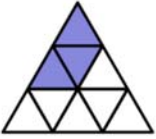








Name _____

Visual Fractions

Add the fractions and write your answer using fraction models.
Shade the shape in your answer.

	$\frac{3}{8}$	+		$\frac{2}{8}$	=	$\frac{5}{8}$	
	$\frac{1}{6}$	+		$\frac{2}{6}$	=	$\frac{3}{6}$	
	$\frac{4}{9}$	+		$\frac{3}{9}$	=	$\frac{7}{9}$	
	$\frac{2}{8}$	+		$\frac{3}{8}$	=	$\frac{5}{8}$	
	$\frac{4}{12}$	+		$\frac{6}{12}$	=	$\frac{10}{12}$	