










Name \_\_\_\_\_

# Comparing temperatures

Put the temperatures in order from coldest to the warmest.

 A	 B	 C	Correct order <b>A</b> <b>C</b> <b>B</b> Temperature <u>A</u> is coldest. Temperature <u>B</u> is warmest.
 A	 B	 C	Correct order <b>C</b> <b>A</b> <b>B</b> Temperature <u>C</u> is coldest. Temperature <u>B</u> is warmest.
 A	 B	 C	Correct order <b>B</b> <b>C</b> <b>A</b> Temperature <u>B</u> is coldest. Temperature <u>A</u> is warmest.