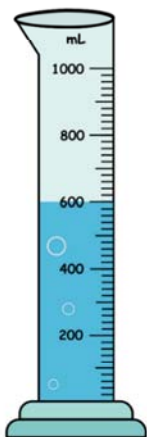


Name _____

Graduated Cylinders

Write the reading and capacity of each graduated cylinder.


1.



Capacity 1000 mL

Reading 600 mL

2.



Capacity 50 mL

Reading 40 mL

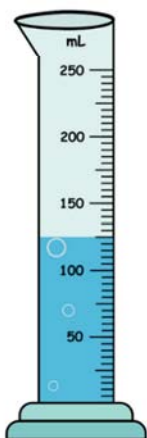
3.



Capacity 500 mL

Reading 150 mL


4.



Capacity 250 mL

Reading 125 mL


5.



Capacity 100 mL

Reading 80 mL

6.



Capacity 1000 mL

Reading 400 mL