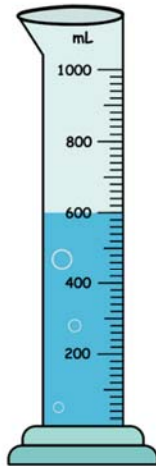


Name \_\_\_\_\_

# Graduated Cylinders

Write the reading and capacity of each graduated cylinder.

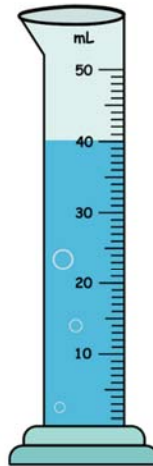
1.



Capacity \_\_\_\_\_

Reading \_\_\_\_\_


2.



Capacity \_\_\_\_\_

Reading \_\_\_\_\_

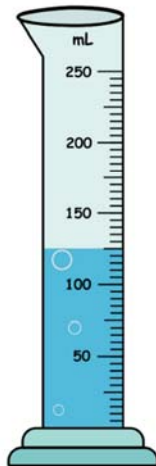
3.



Capacity \_\_\_\_\_

Reading \_\_\_\_\_

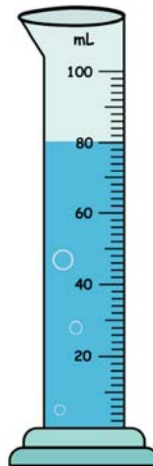
4.



Capacity \_\_\_\_\_

Reading \_\_\_\_\_


5.



Capacity \_\_\_\_\_

Reading \_\_\_\_\_

6.



Capacity \_\_\_\_\_

Reading \_\_\_\_\_