







## Reading a Weighted Balance and Scale

Write the weight of each individual object.

1)  =  Weight of each  = 4 oz

2)  =  Weight of each  = 2 oz

3)  =  Weight of each  = 3 oz

4)  =  Weight of each  = 4 oz

5)  =  Weight of each  = 3.2 oz

6)  =  Weight of each  = 8 oz