


Name _____

Comparing temperatures

Write the temperature indicated on each thermometer and order them from warmest to coldest.

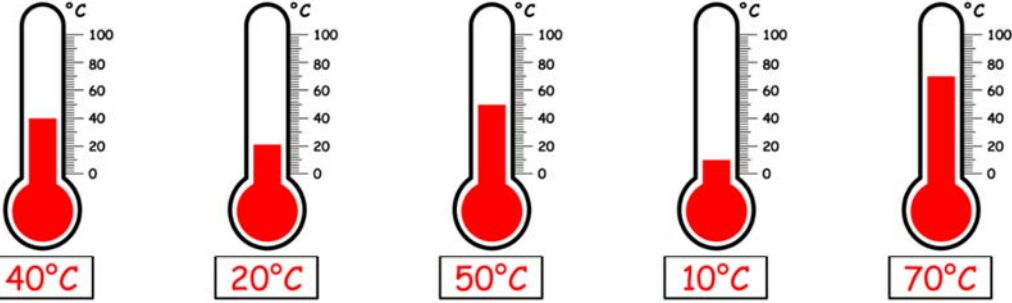
1)



80°C 60°C 90°C 20°C 40°C

Warmest to coldest 90°C, 80°C, 60°C, 40°C, 20°C

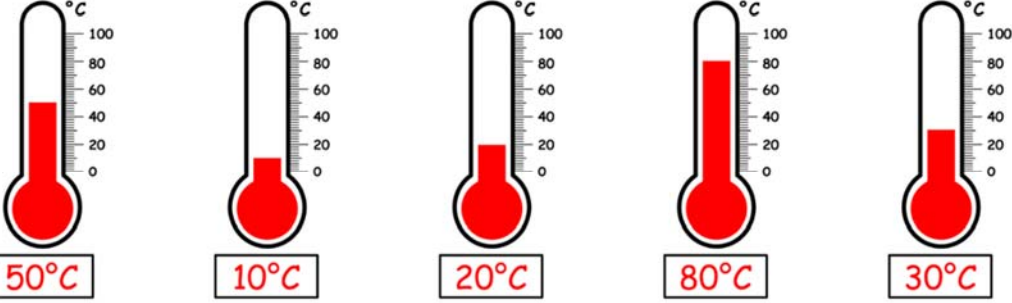
2)



40°C 20°C 50°C 10°C 70°C

Warmest to coldest 70°C, 50°C, 40°C, 20°C, 10°C

3)



50°C 10°C 20°C 80°C 30°C

Warmest to coldest 80°C, 50°C, 30°C, 20°C, 10°C