

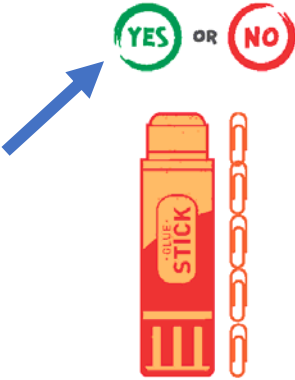
Name _____

LET'S MEASURE

Look at the objects, they are measured with a "paperclips" unit.

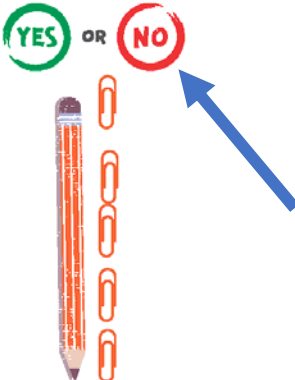
Is this glue stick measured correctly?

YES OR NO




Is this pencil measured correctly?


YES OR NO



Count how many paperclips long each object is and fill in the blanks.




The pen is 5 paper clips long.



The scissors are 7 paper clips long.



The glue is 5 paper clips long.



The eraser is 3 paper clips long.