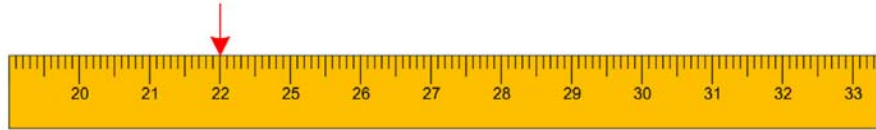


Name _____

Reading Tape

Draw the pointer to show the reading in each tape(cm).


1) 22cm



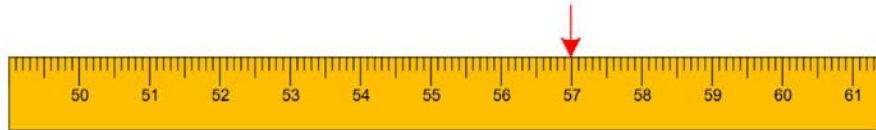
2) 48cm



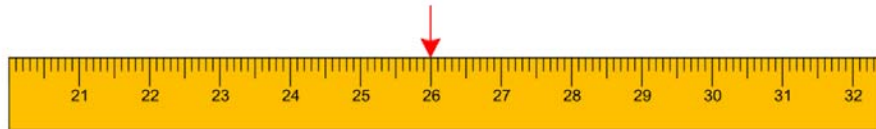
3) 39cm



4) 57cm



5) 26cm



6) 20cm



7) 72cm



8) 51cm

