
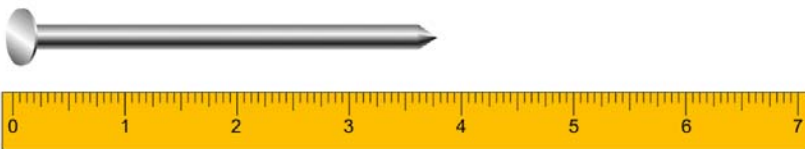
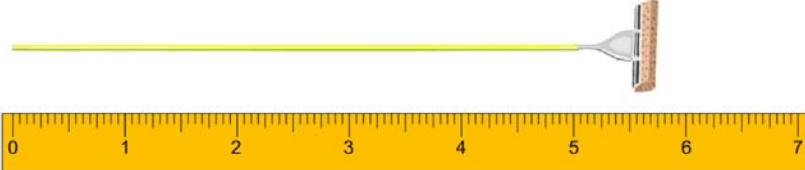
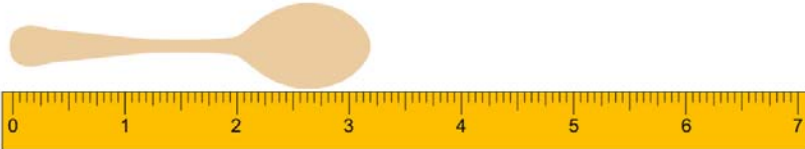



Name _____

Estimating Length

Estimate the length of each object using ruler.

Check the correct option.

| | |
|---|--|
| <p>The Length of a key is closer to?</p>  | <p>1 in <input checked="" type="checkbox"/></p> <p>2 in <input type="checkbox"/></p> |
|  | <p>3 in <input type="checkbox"/></p> <p>4 in <input checked="" type="checkbox"/></p> |
|  | <p>5 in <input type="checkbox"/></p> <p>6 in <input checked="" type="checkbox"/></p> |
|  | <p>3 in <input checked="" type="checkbox"/></p> <p>4 in <input type="checkbox"/></p> |
|  | <p>5 in <input type="checkbox"/></p> <p>6 in <input checked="" type="checkbox"/></p> |