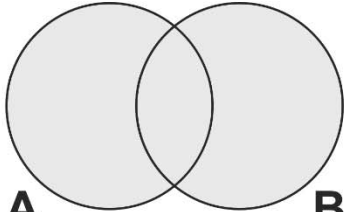
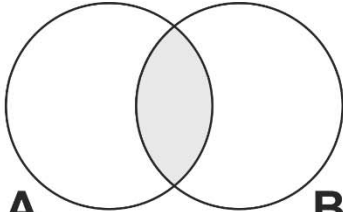
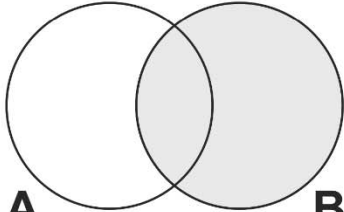
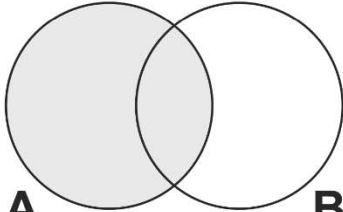
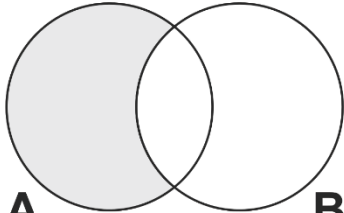
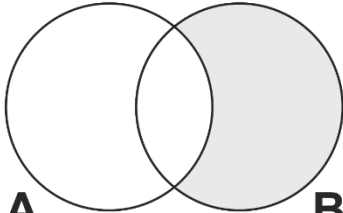


Name _____

Venn Diagrams

Name the shaded regions for the Venn Diagrams

| | |
|--|---|
| <p>U</p>  <p>A B</p> <input type="text"/> | <p>U</p>  <p>A B</p> <input type="text"/> |
| <p>U</p>  <p>A B</p> <input type="text"/> | <p>U</p>  <p>A B</p> <input type="text"/> |
| <p>U</p>  <p>A B</p> <input type="text"/> | <p>U</p>  <p>A B</p> <input type="text"/> |