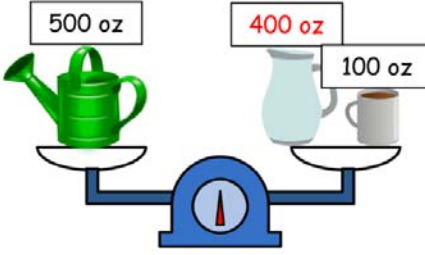
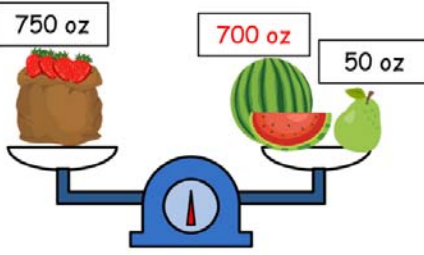
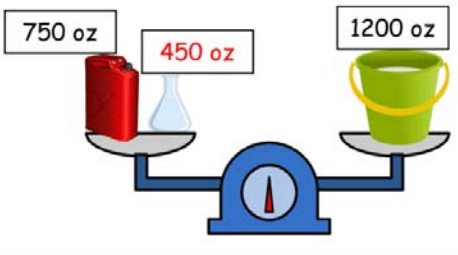
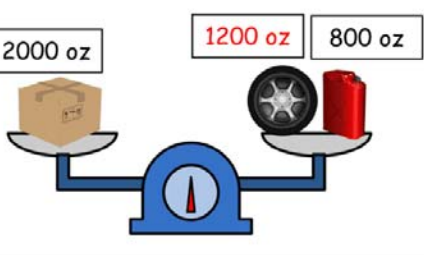
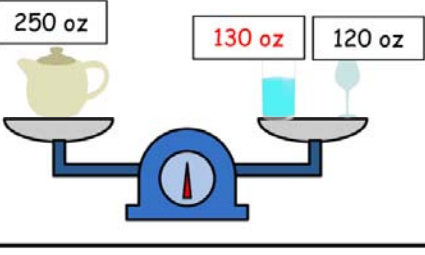
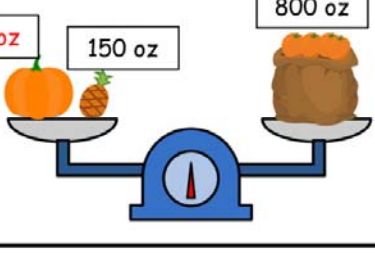
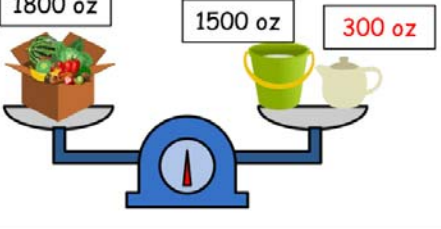
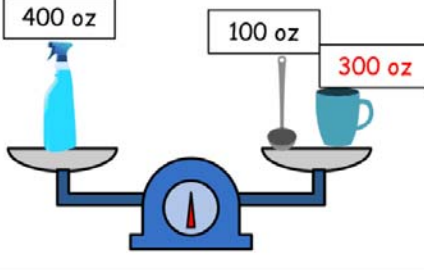


Name _____

Reading a Weighted Balance and Scale

Calculate the missing weight of an object to make the scales balance.

 <p>500 oz 400 oz 100 oz</p>	 <p>750 oz 700 oz 50 oz</p>
 <p>750 oz 450 oz 1200 oz</p>	 <p>2000 oz 1200 oz 800 oz</p>
 <p>250 oz 130 oz 120 oz</p>	 <p>650 oz 150 oz 800 oz</p>
 <p>1800 oz 1500 oz 300 oz</p>	 <p>400 oz 100 oz 300 oz</p>