




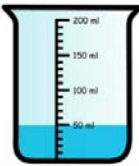
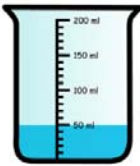
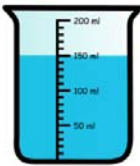



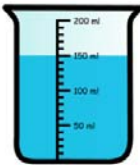


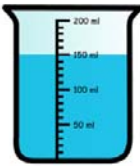







Name _____

Liquid Measurements

Calculate the total volume of liquid for given container.

 1	 2	 3	 4	$1 + 4 = \underline{300ml}$ $100ml + 200ml = 300ml$
 1	 2	 3	 4	$2 + 3 = \underline{100ml}$ $50ml + 50ml = 100ml$
 1	 2	 3	 4	$1 + 2 = \underline{250ml}$ $50ml + 200ml = 250ml$
 1	 2	 3	 4	$3 + 4 = \underline{200ml}$ $150ml + 50ml = 200ml$
 1	 2	 3	 4	$2 + 4 = \underline{250ml}$ $50ml + 200ml = 250ml$