



Name _____

Estimating Length


Estimate the length for each object. Each unit cube is 1 cm long. Write the answer in cm.




8cm




13cm



10cm



4cm



8cm