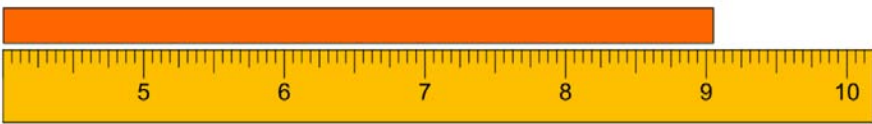
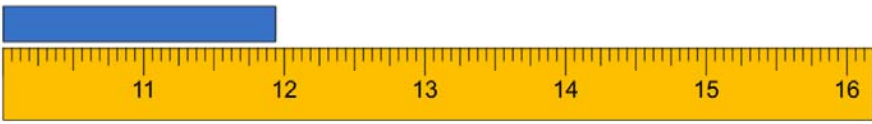
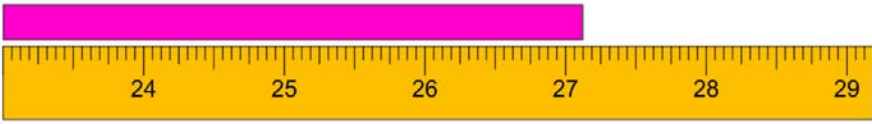
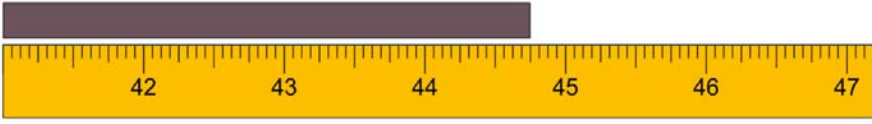
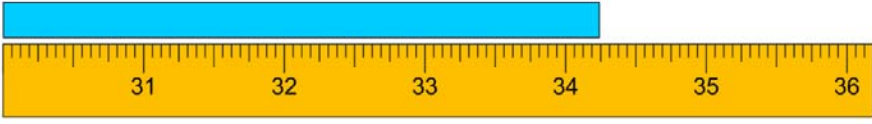
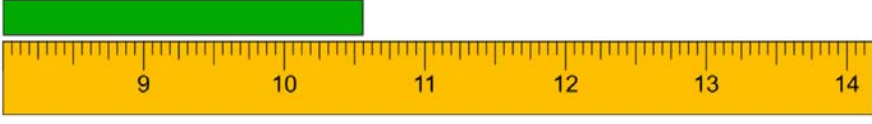
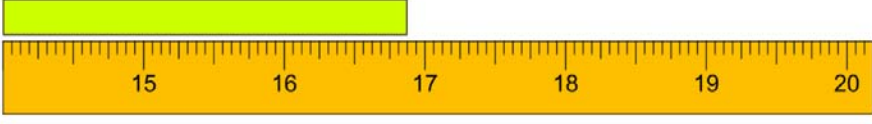



Name _____

Reading Tape

Measure the length of each bar and write the value in inches (One-sixteenths).

- 1)  9 $\frac{1}{16}$ in
- 2)  11 $\frac{15}{16}$ in
- 3)  27 $\frac{1}{8}$ in
- 4)  44 $\frac{3}{4}$ in
- 5)  34 $\frac{1}{4}$ in
- 6)  10 $\frac{9}{16}$ in
- 7)  16 $\frac{7}{8}$ in
- 8)  22 $\frac{3}{16}$ in