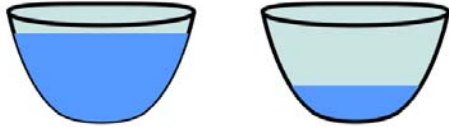









Name _____

Liquid Measurements

<p>Color A to show the liquid more than B.</p>  <p>A B</p>	<p>Color B to show the liquid more than A.</p>  <p>A B</p>
<p>Color A to show the liquid less than B.</p>  <p>A B</p>	<p>Color B to show the liquid less than A.</p>  <p>A B</p>
<p>Color B to show the liquid more than A.</p>  <p>A B</p>	<p>Color A to show the liquid more than B.</p>  <p>A B</p>
<p>Color B to show the liquid more than A.</p>  <p>A B</p>	<p>Color A to show the liquid less than B.</p>  <p>A B</p>