









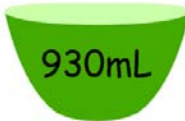







Name \_\_\_\_\_

# Liquid Measurements

Calculate the total volume of liquid in milliliters.

 $+$  <b>1400 mL</b>	 $+$  <b>900 mL</b>
 $+$  <b>1100 mL</b>	 $+$  <b>1200 mL</b>
 $+$  <b>1100 mL</b>	 $+$  <b>1800 mL</b>
 $+$  <b>1300 mL</b>	 $+$  <b>700 mL</b>