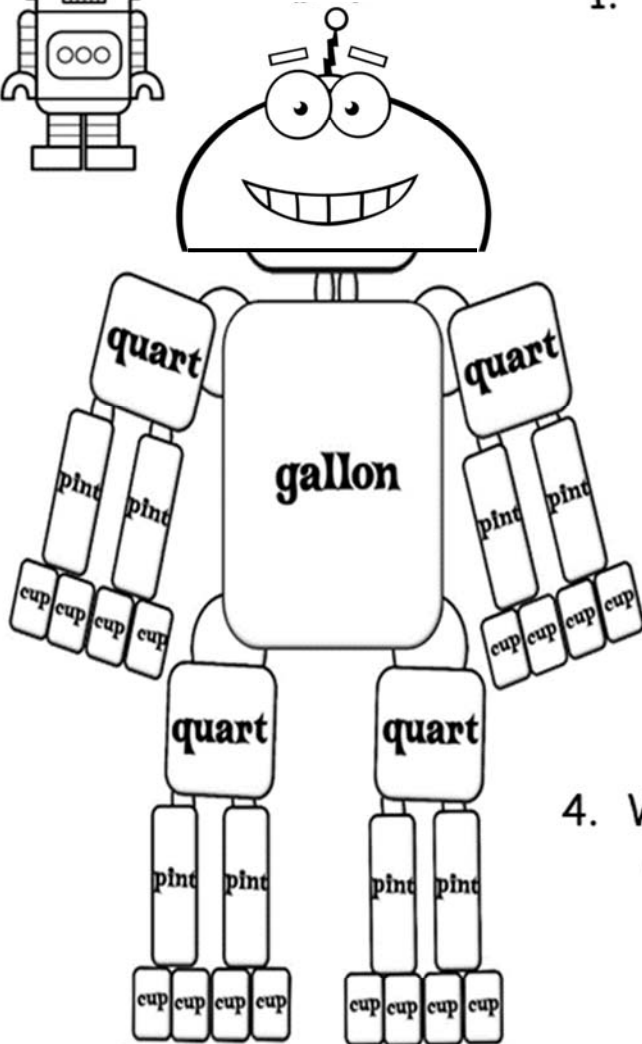



NAME: \_\_\_\_\_

## GALLON MAN

Use the illustration to help you answer the question.




1. How many cups are in a gallon?  
\_\_\_\_\_

2. How many cups are in a quart?  
\_\_\_\_\_

3. How many pints are in a gallon?  
\_\_\_\_\_

4. Which is greater:  
a quart or a pint?  
\_\_\_\_\_



How Did You Do? 😊 😐 ☹️