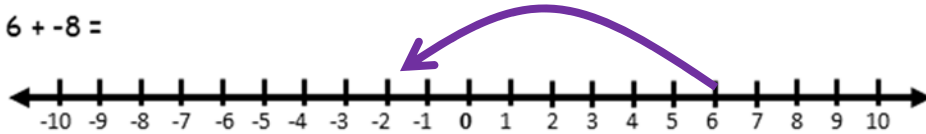


NAME: _____

NEGATIVE NUMBERS

Use the provided number line to help you add and subtract

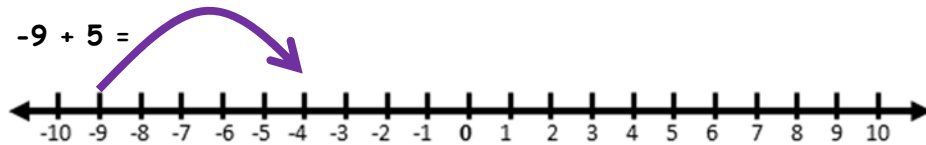
$6 + -8 =$



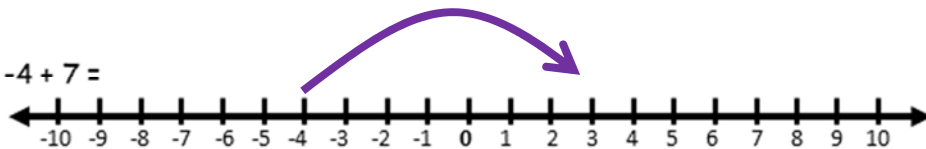
$-2 + -2 =$



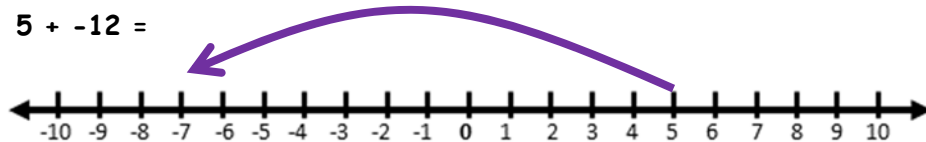
$-9 + 5 =$



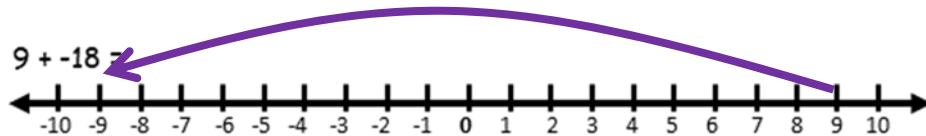
$-4 + 7 =$



$5 + -12 =$



$9 + -18 =$



How Did You Do? 😊 😐 ☹️