









Name _____

Graduated Cylinders

Calculate the volume of object by reading the measurement with and without object.

 	 
Initial measurement <u>500 mL</u>	Initial measurement <u>400 mL</u>
Final measurement <u>600 mL</u>	Final measurement <u>600 mL</u>
Volume of object <u>100 mL</u>	Volume of object <u>200 mL</u>
 	 
Initial measurement <u>200 mL</u>	Initial measurement <u>600 mL</u>
Final measurement <u>400 mL</u>	Final measurement <u>850 mL</u>
Volume of object <u>200 mL</u>	Volume of object <u>250 mL</u>