











Name \_\_\_\_\_

# Reading Tape

Carefully cut out the ruler below. Measure the length of each line segment in inches.

- |     |  |                                  |
|-----|--|----------------------------------|
| 1)  |    | 5 in                             |
| 2)  |     | 4 in                             |
| 3)  |    | 6 in                             |
| 4)  |     | 2 in                             |
| 5)  |     | 3 <sup>1</sup> / <sub>4</sub> in |
| 6)  |   | 4 <sup>1</sup> / <sub>2</sub> in |
| 7)  |  | 5 <sup>3</sup> / <sub>4</sub> in |
| 8)  |   | 1 <sup>3</sup> / <sub>4</sub> in |
| 9)  |   | 3 in                             |
| 10) |   | 4 <sup>1</sup> / <sub>4</sub> in |

Note: Measurement may be not exact same. It may be vary due to your computer printer settings.